












Şekil Sayı Eşleştirme

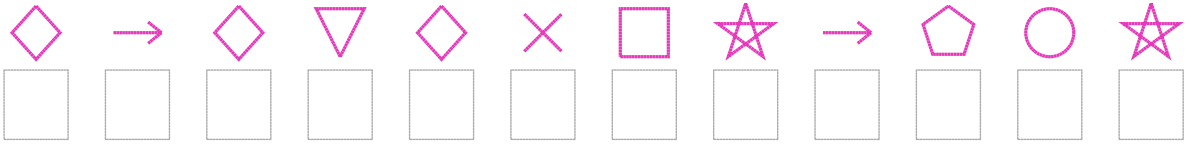
| | | | | | | | | | |
|---|---|---|---|---|---|--|---|---|---|
|  |  |  |  |  |  |  |  |  |  |
| = 1 | = 8 | = 5 | = 6 | = 4 | = 7 | = 9 | = 0 | = 2 | = 3 |

Aşağıdaki uzun şifreleri hatasız çözerek altlarına yazın:

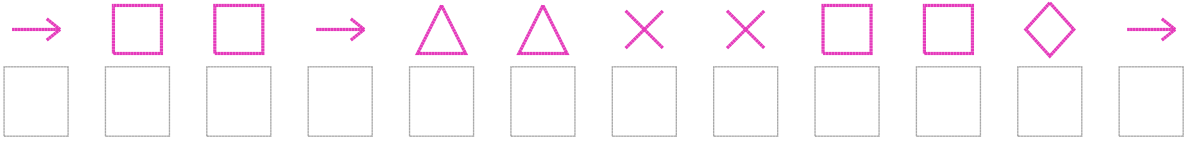
1. Şifre



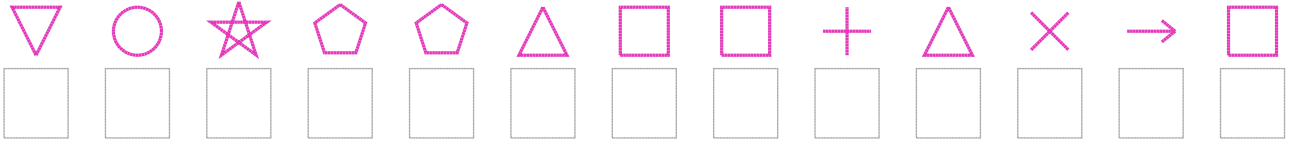
2. Şifre



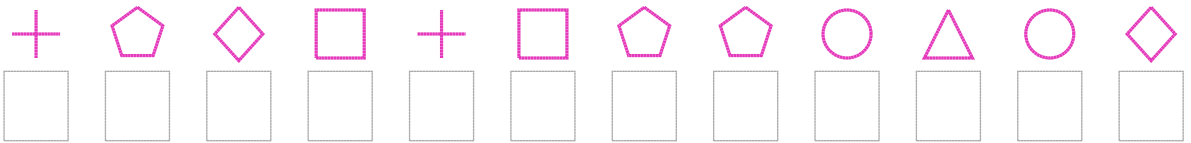
3. Şifre



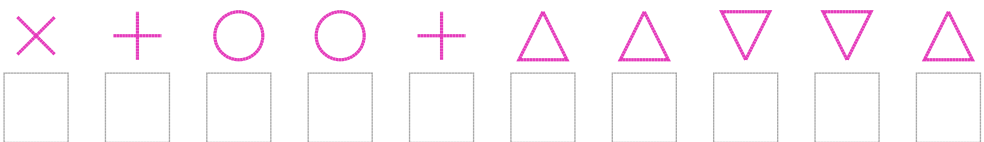
4. Şifre



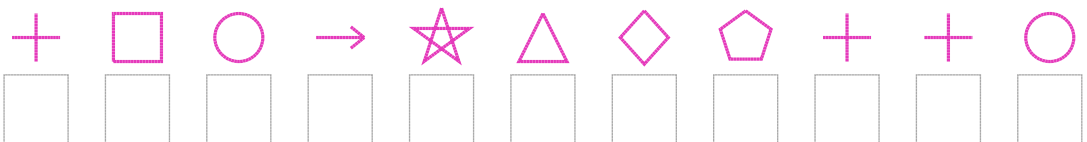
5. Şifre



6. Şifre



7. Şifre



□ BONUS: 4. ve 5. şifrenin üçüncü rakamının toplamı kaçtır?

Cevap Anahtarı

1. Şifre: 5981751857666

2. Şifre: 030602813791

3. Şifre: 388355228803

4. Şifre: 6917758845238

5. Şifre: 470848779590

6. Şifre: 2499455665

7. Şifre: 48931507449

□ Bonus Soru Cevabı: 1